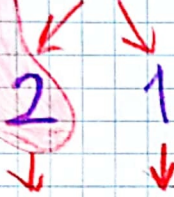


# Zihinden Toplama İşlemi

## 10 sayısına tamamlama yöntemi

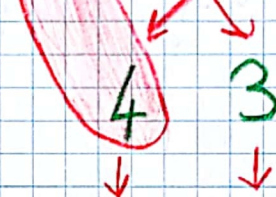
$$8 + 3 = 11$$



$$8 + 2 + 1$$

$$10 + 1 = 11$$


$$6 + 7 = 13$$



$$6 + 4 + 3$$

$$10 + 3 = 13$$


$$14 + 5 = 19$$



$$10 + 5 + 4$$

$$10 + 9 = 19$$

$$9 + 9 = 18$$



$$9 + 1 + 8$$

$$10 + 8 = 18$$

## ETKİNLİK

Aşağıdaki toplama işlemlerini zihinden yapınız.

$$7 + 5 = \dots$$



$$\square + \square = \square$$

$$8 + 8 = \square$$

$$5 + 6 = \square$$

$$6 + 6 = \square$$