



ZİHİNDEN TOPLAMA İŞLEMİ -4

10'a Tamamlama Yolu

$$\begin{array}{c} \boxed{8} + \boxed{6} = ? \\ \quad \quad \quad \swarrow \quad \searrow \\ \quad \quad \quad \boxed{2} \quad \boxed{4} \\ \boxed{10} + \boxed{4} = \boxed{14} \end{array}$$

İlk toplanan 8 rakamını 10'a tamamlamak için 2'ye ihtiyacımız var. Bu 2'yi ikinci toplanan 6'dan alırız. 6'yı 2+4 olarak ayırırız. 8 ile 2'yi toplarız, 10 buluruz. Sonra da 10 ile bekleyen 4'ü toplarız. Sonucu 14 buluruz.

- Aşağıdaki toplama işlemlerini 10'a tamamlama yoluyla zihinden çözünüz.

$$\begin{array}{c} \boxed{7} + \boxed{5} = \boxed{} \\ \quad \quad \quad \swarrow \quad \searrow \\ \quad \quad \quad \boxed{} \quad \boxed{} \end{array}$$

$$\boxed{} + \boxed{} = \boxed{}$$

$$\begin{array}{c} \boxed{6} + \boxed{7} = \boxed{} \\ \quad \quad \quad \swarrow \quad \searrow \\ \quad \quad \quad \boxed{} \quad \boxed{} \end{array}$$

$$\boxed{} + \boxed{} = \boxed{}$$






$$5 + 8 = \square$$




$$\square + \square = \square$$

$$9 + 5 = \square$$




$$\square + \square = \square$$

$$3 + 8 = \square$$




$$\square + \square = \square$$

$$4 + 7 = \square$$



$$\square + \square = \square$$

$$2 + 9 = \square$$



$$\square + \square = \square$$

$$7 + 6 = \square$$



$$\square + \square = \square$$

$$8 + 7 = \square$$



$$\square + \square = \square$$

$$5 + 9 = \square$$



$$\square + \square = \square$$

