




"BÜTÜN - YARIM - ÇEYREK"




BÜTÜN




YARIM



YARIM



ÇEYREK ÇEYREK



ÇEYREK ÇEYREK

Önemli Bilgi

- * Bir bütün iki yarım eder.
- * Bir bütün dört çeyrek eder.
- * Bir yarım iki çeyrek eder.