



## SİMETRİ - TEST

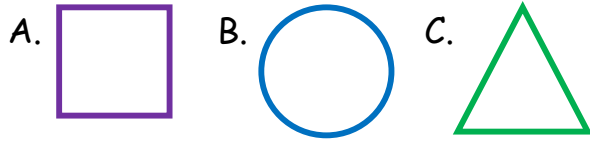
1.. Aşağıdaki hangi harfin simetriği yoktur?

- A. B B. H C. S

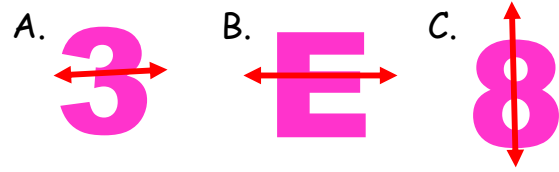
2.. Aşağıdaki şekillerin hangisinin simetriği yoktur?



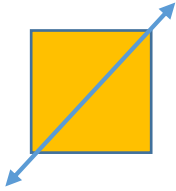
3.. Aşağıdaki şekillerin hangisinin simetri doğrusu en fazladır?



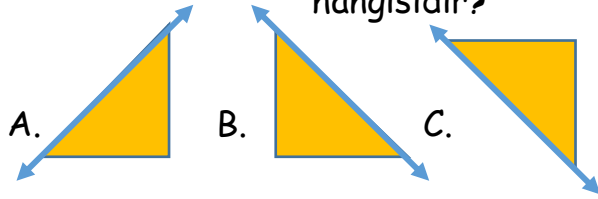
4.. Aşağıdakilerden hangisinin simetri doğrusu eksiktir?



5..



Yandaki karenin simetri doğrusundan katlanmış şekli hangisidir?

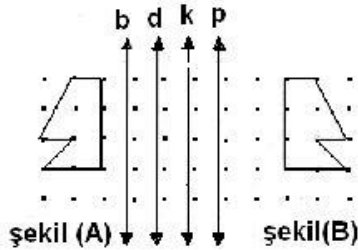


6.. **C E . . . . . E . . . . .**

Yukarıda simetrik kelimelerden oluşan bir giysi adı yazmaktadır. Noktalı yerlere hangi harfler yazılmalıdır?

- A. K,T B. T,V C. V,Z

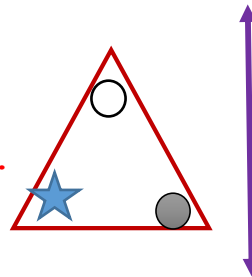
7..



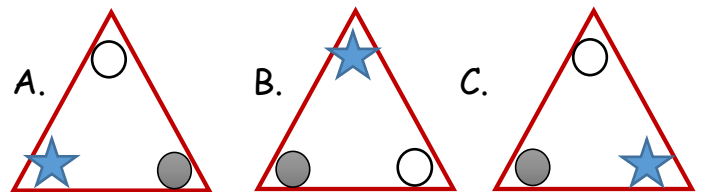
Yukarıdaki şekil (A)'nın simetrisi şekil (B)' dir. Buna göre simetri doğrusu hangisidir?

- A. d B. k C. p

8..

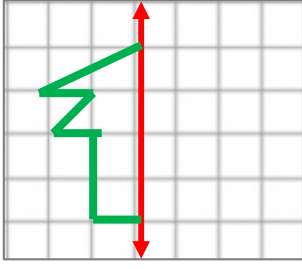


Yukarıdaki şeklin simetri doğrusuna göre simetriği hangisidir?



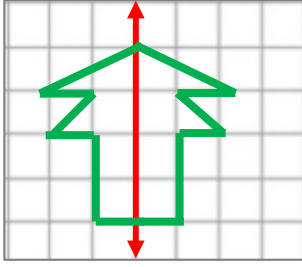


9..

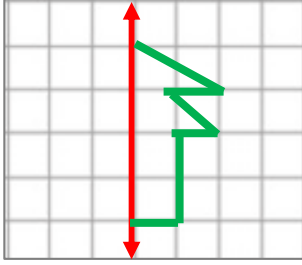


Yukarıdaki görselin simetri doğrusuna göre tam çizimi hangisidir?

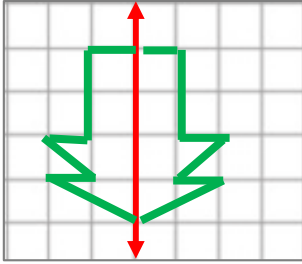
A.



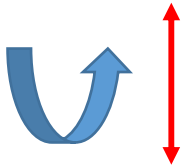
B.



C.



11..



Yukarıdaki şeklin simetri doğrusuna göre simetriği hangisidir?

A.



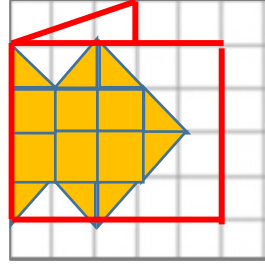
B.



C.

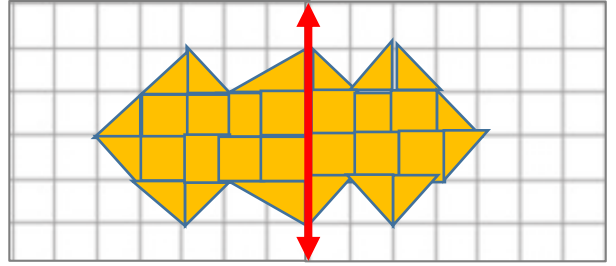


10..

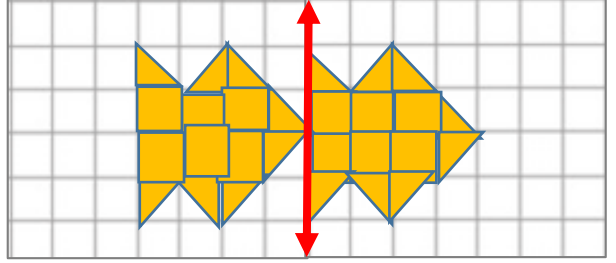


Tam ortasından katlanan yukarıdaki şekil katlama yerinden açıldığında nasıl bir şekil ortaya çıkar?

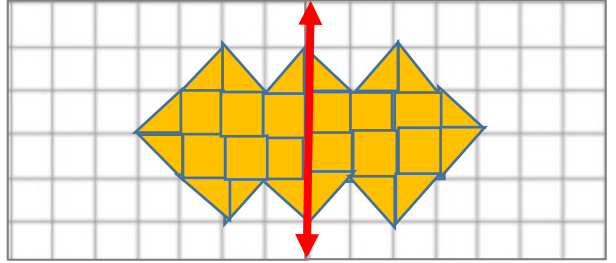
A.



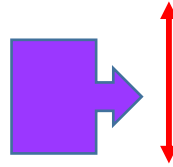
B.



C.



12..




Yukarıdaki şeklin simetri doğrusuna göre simetriği hangisidir?

A.



B.



C.

