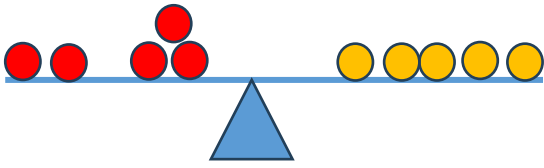




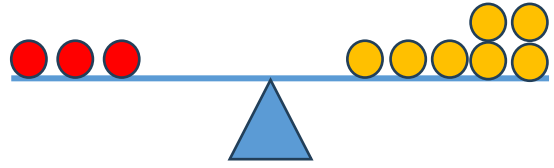
EŞİTLİK ETKİNLİĞİ -3

- Aşağıdaki tahterevallilerin dengede olabilmesi için örnekteki gibi eksik bırakılan boncukları tamamlayarak toplama işlemlerini yapınız.



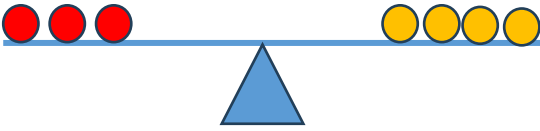
$$2 + 3 = 5$$

$$5 = 5$$



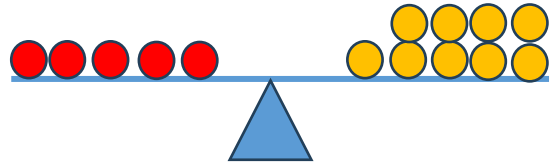
$$\dots + \dots = \dots$$

$$\dots = \dots$$



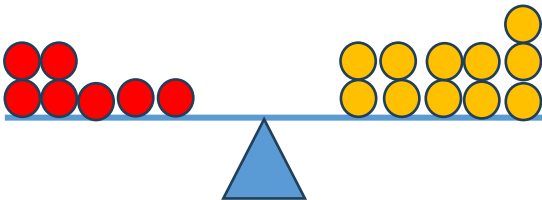
$$\dots + \dots = \dots$$

$$\dots = \dots$$



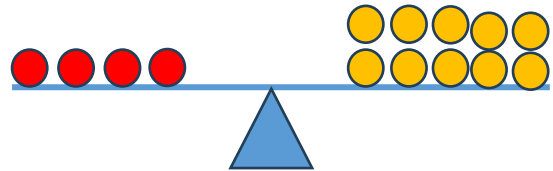
$$\dots + \dots = \dots$$

$$\dots = \dots$$



$$\dots + \dots = \dots$$

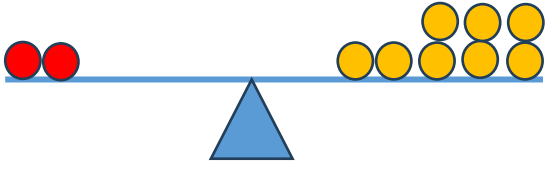
$$\dots = \dots$$



$$\dots + \dots = \dots$$

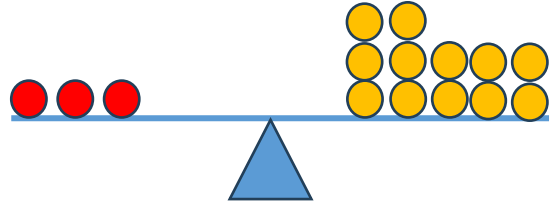
$$\dots = \dots$$





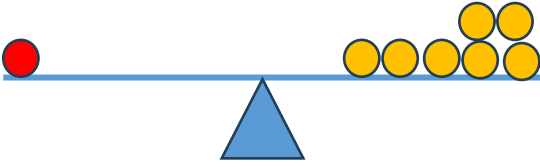
$$\dots + \dots = \dots$$

$$\dots = \dots$$



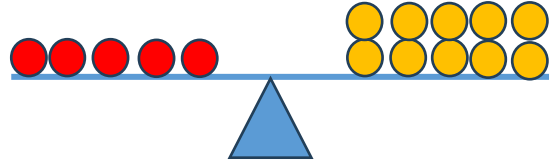
$$\dots + \dots = \dots$$

$$\dots = \dots$$



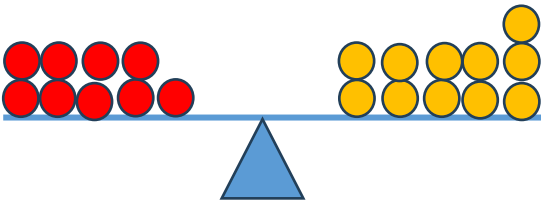
$$\dots + \dots = \dots$$

$$\dots = \dots$$



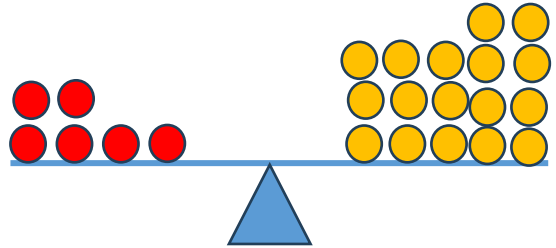
$$\dots + \dots = \dots$$

$$\dots = \dots$$



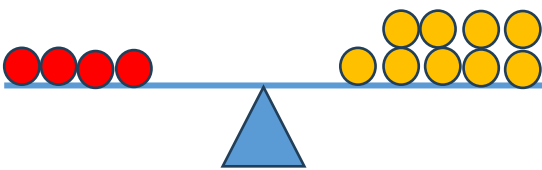
$$\dots + \dots = \dots$$

$$\dots = \dots$$



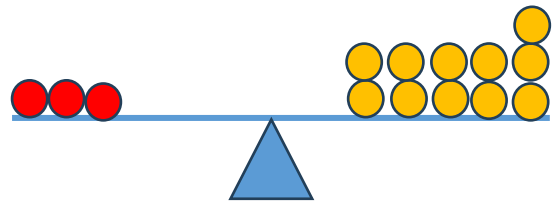
$$\dots + \dots = \dots$$

$$\dots = \dots$$



$$\dots + \dots = \dots$$

$$\dots = \dots$$



$$\dots + \dots = \dots$$

$$\dots = \dots$$

