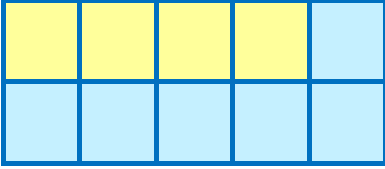





TOPLAMI 10 OLAN SAYILAR ETKİNLİĞİ -2


- Aşağıdaki örneğe göre tablodaki renkleri 10'a tamamlayıp, işlemleri yapınız.




$$4 + 6 = 10$$




$$\dots + \dots = \dots$$




$$\dots + \dots = \dots$$




$$\dots + \dots = \dots$$




$$\dots + \dots = \dots$$




$$\dots + \dots = \dots$$




$$\dots + \dots = \dots$$




$$\dots + \dots = \dots$$




$$\dots + \dots = \dots$$



$$\dots + \dots = \dots$$



$$\dots + \dots = \dots$$




$$\dots + \dots = \dots$$





- Aşağıdaki örneğe göre tablodaki renkleri 10'a tamamlayıp, işlemleri yapınız.



$$7 + 3 = 10$$



$$\dots + \dots = \dots$$




$$\dots + \dots = \dots$$



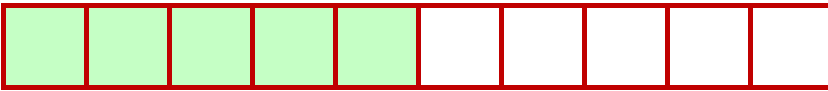
$$\dots + \dots = \dots$$



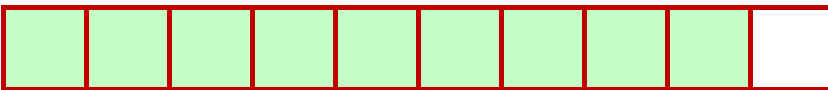
$$\dots + \dots = \dots$$



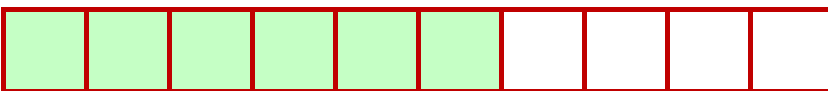
$$\dots + \dots = \dots$$



$$\dots + \dots = \dots$$



$$\dots + \dots = \dots$$



$$\dots + \dots = \dots$$

