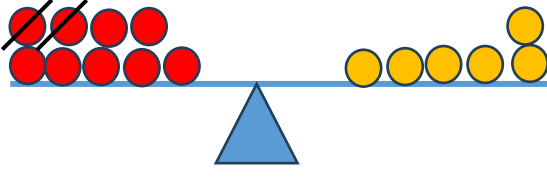




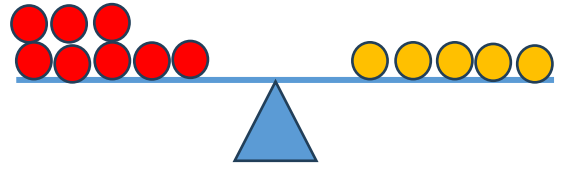
## EŞİTLİK ETKİNLİĞİ -4

- Aşağıdaki tahterevallilerin dengede olabilmesi için örnekteki gibi fazla boncukların üzerini çizerek çıkarma işlemini yapınız.



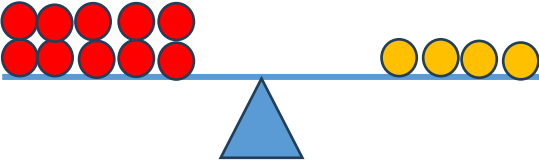
$$8 - 2 = 6$$

$$6 = 6$$



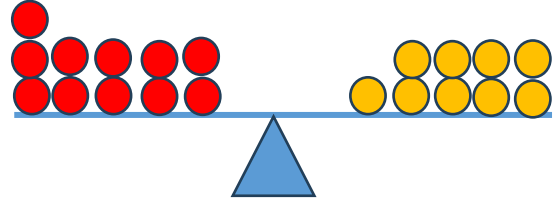
$$\dots - \dots = \dots$$

$$\dots = \dots$$



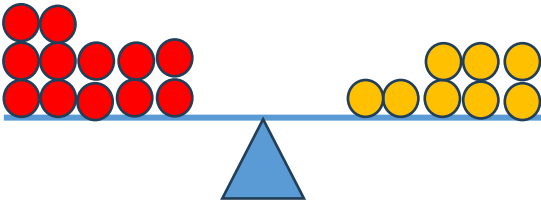
$$\dots - \dots = \dots$$

$$\dots = \dots$$



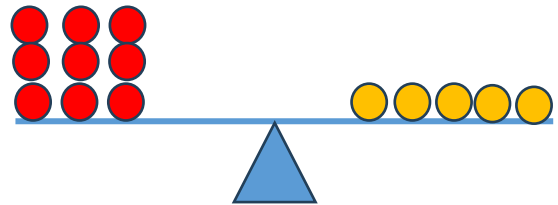
$$\dots - \dots = \dots$$

$$\dots = \dots$$



$$\dots - \dots = \dots$$

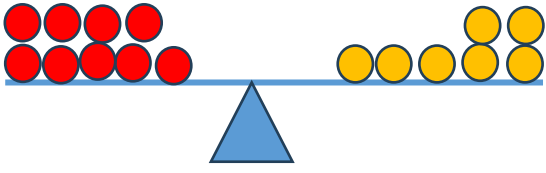
$$\dots = \dots$$



$$\dots - \dots = \dots$$

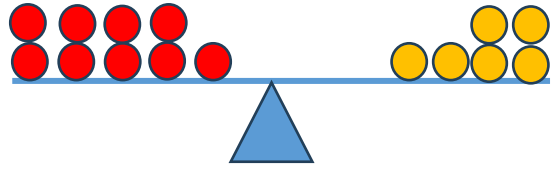
$$\dots = \dots$$





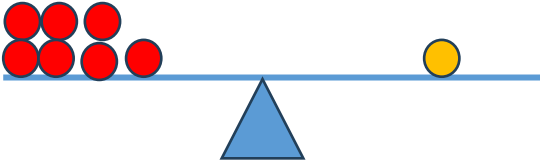
$$\dots - \dots = \dots$$

$$\dots = \dots$$



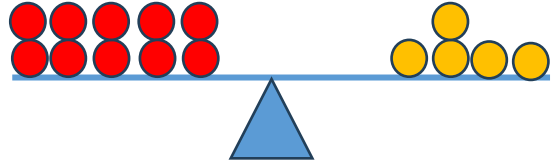
$$\dots - \dots = \dots$$

$$\dots = \dots$$



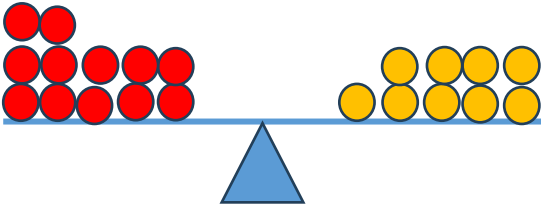
$$\dots - \dots = \dots$$

$$\dots = \dots$$



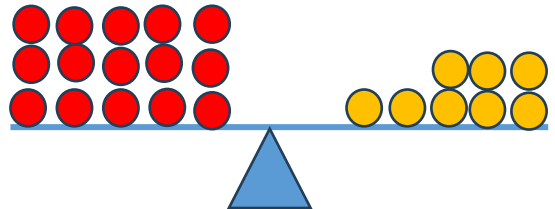
$$\dots - \dots = \dots$$

$$\dots = \dots$$



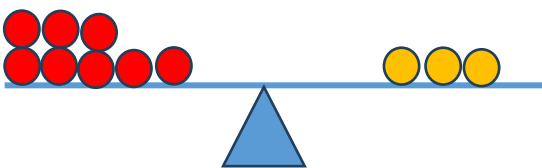
$$\dots - \dots = \dots$$

$$\dots = \dots$$



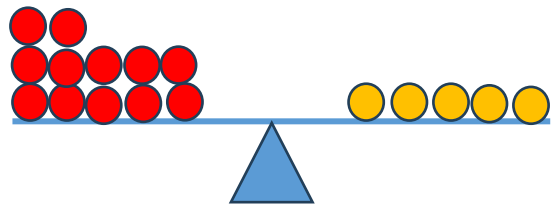
$$\dots - \dots = \dots$$

$$\dots = \dots$$



$$\dots - \dots = \dots$$

$$\dots = \dots$$



$$\dots - \dots = \dots$$

$$\dots = \dots$$

