



## VERİLMİYEN TOPLANANI BULMA -1

Aşağıda verilen örneğe göre toplama işleminde verilmeyen sayıyı bulunuz. Bulduğunuz sayı kadar boncuk çiziniz.

	+		=		$\begin{array}{r} \square \\ + 3 \\ \hline 8 \end{array}$	$\begin{array}{r} 8 \\ - 3 \\ \hline 5 \end{array}$
--	---	--	---	--	---	---

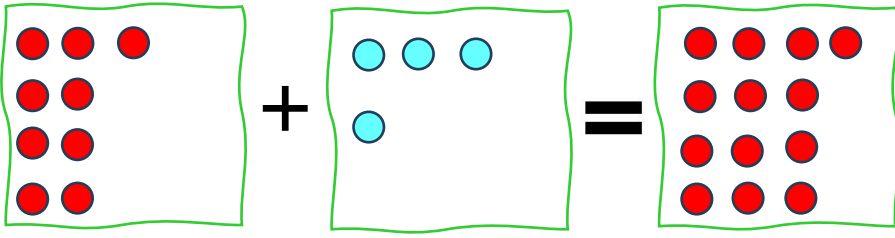
	+		=		$\begin{array}{r} \square \\ + 5 \\ \hline 10 \end{array}$	$\begin{array}{r} \square \\ - \square \\ \hline \end{array}$
--	---	--	---	--	--	---

	+		=		$\begin{array}{r} \square \\ + 7 \\ \hline 12 \end{array}$	$\begin{array}{r} \square \\ - \square \\ \hline \end{array}$
--	---	--	---	--	--	---

	+		=		$\begin{array}{r} \square \\ + 6 \\ \hline 15 \end{array}$	$\begin{array}{r} \square \\ - \square \\ \hline \end{array}$
--	---	--	---	--	--	---


	+		=		$\begin{array}{r} \square \\ + 4 \\ \hline 18 \end{array}$	$\begin{array}{r} \square \\ - \square \\ \hline \end{array}$
--	---	--	---	--	--	---






$$\begin{array}{r} 9 \\ + \square \\ \hline 13 \end{array}$$

$$\begin{array}{r} 13 \\ - 9 \\ \hline 4 \end{array}$$




$$\begin{array}{r} 6 \\ + \square \\ \hline 14 \end{array}$$

$$\begin{array}{r} \phantom{13} \\ - \phantom{9} \\ \hline \phantom{4} \end{array}$$




$$\begin{array}{r} 5 \\ + \square \\ \hline 11 \end{array}$$

$$\begin{array}{r} \phantom{13} \\ - \phantom{9} \\ \hline \phantom{4} \end{array}$$




$$\begin{array}{r} 8 \\ + \square \\ \hline 16 \end{array}$$

$$\begin{array}{r} \phantom{13} \\ - \phantom{9} \\ \hline \phantom{4} \end{array}$$



$$\begin{array}{r} 9 \\ + \square \\ \hline 14 \end{array}$$

$$\begin{array}{r} \phantom{13} \\ - \phantom{9} \\ \hline \phantom{4} \end{array}$$



$$\begin{array}{r} 7 \\ + \square \\ \hline 12 \end{array}$$

$$\begin{array}{r} \phantom{13} \\ - \phantom{9} \\ \hline \phantom{4} \end{array}$$

